




14th December	
<p>Ian is paid £6.50 an hour. Bill is paid £8 an hour.</p> <p>On a Saturday, Bill works 4 hours and Ian works 5 hours.</p> <p>Who earns more?</p>	<div style="text-align: right;">             Corbettmaths         </div> <p> <i>Ian: <math>6.5 \times 5 = 32.5</math></i>  <i>Bill: <math>8 \times 4 = 32</math></i> </p> <p><i>Ian earns 50p more.</i></p>
<p>Work out the missing number.</p> <p><b>35 + <span style="border: 1px solid black; padding: 2px;">126</span> = 161</b></p>	
<p>Write down the time shown on the clock.</p> <p><i>7:10</i></p>	
<p>The perimeter of this rectangle is 15cm.</p> <p style="text-align: center;"><b>5cm</b></p> <div style="text-align: center;">  </div> <p style="text-align: center;"><i>5cm</i></p>	<p>Find the size of y.</p> <p><i><math>5 + 5 = 10</math></i></p> <p><i><math>15 - 10 = 5</math></i></p> <p><i><math>5 \div 2 = 2.5</math></i></p>
<p>42 x 19</p> <div style="display: flex; justify-content: space-around;"> <div style="text-align: left;"> <math display="block">\begin{array}{r} 42 \\ \times 19 \\ \hline 378 \\ 420 \\ \hline 798 \end{array}</math> </div> <div style="text-align: left;"> <math display="block">\begin{array}{r} 42 \\ \times 19 \\ \hline 798 \end{array}</math> </div> </div>	<p>9.2 - 1.36</p> <p style="text-align: center;"><i>7.84</i></p>