
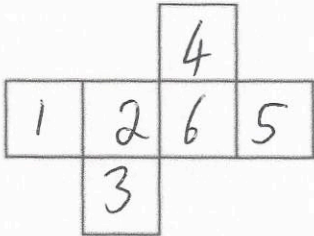
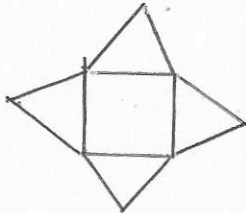


17th December		 Corbettmaths
2000 - 1320	$77 + 121 + 34$	
680	232	
<p>The numbers 1,2,3,4,5 and 6 are written on the faces of the cube.</p> <p>The numbers on the opposite faces add up to 7.</p> <p>Write the numbers on the net of the cube.</p>		
<p>Draw a net of a square based pyramid.</p> 		
<p>A rectangle has area 18cm^2.</p> <p>Write down one pair of possible values for its length and width.</p>	<p>length = <u>18</u> cm 9 6</p> <p>width = <u>1</u> cm 2 3</p> <p style="text-align: right;"><i>ek</i></p>	
<p>Work out the perimeter of your rectangle.</p> <p>18×1 Perimeter 38cm</p> <p>9×2 Perimeter 22cm</p> <p>6×3 Perimeter 18cm</p>		