

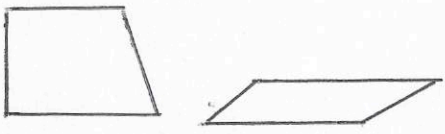

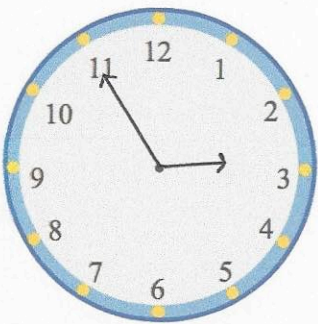


24th December		 Corbettmaths
<p>Find the difference between 9303 and 2553.</p> <p style="text-align: center;">6750</p>	$\begin{array}{r} 8 \text{ } 1 \\ 9303 \\ - 2553 \\ \hline 6750 \end{array}$	
<p>5 friends go on a coach trip. The total cost of the trip is £385.</p> <p>Work out the cost for each person.</p> $5 \overline{) 385} \begin{array}{l} 077 \end{array}$		
<p>Draw a shape with no lines of symmetry.</p> 	<p>Draw a shape with 3 lines of symmetry.</p> 	
<p>Jonny says "When you multiply an even number and an odd number, you will always get an odd number."</p> <p>Is Jonny correct? <i>No</i></p>	$6 \times 3 = 18$	
	<p>Nick leaves his house at 1:15pm</p> <p>He meets his friend 100 minutes later.</p> <p><i>1 hour 40 mins</i></p> <p>Show what time he met his friend on the clock.</p> <p><i>2:55 pm</i></p>	