
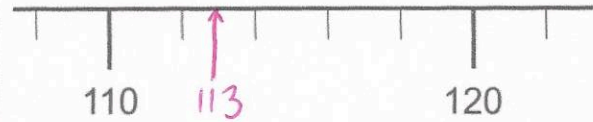


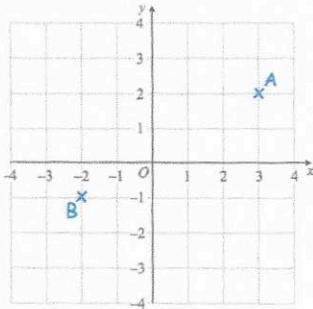
10th February



Corbettmaths

What is the number? **190**

Draw an arrow to show 113



Write down the coordinates of A

(3, 2)

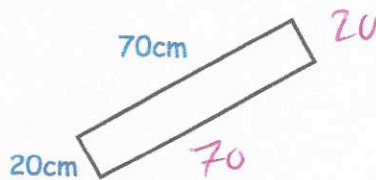
Write down the coordinates of B

(-2, -1)

Mrs Jenkins had 214 Christmas cards to post.
She has posted 127 so far.
How many Christmas cards does she have left to post?

$$\begin{array}{r} 214 \\ -127 \\ \hline 87 \end{array}$$

Find the perimeter of the rectangle



$$70 + 20 + 70 + 20 = 180 \text{ cm}$$

Work out

 $\frac{3}{5}$ of 45

$$45 \div 5 = 9$$

$$9 \times 3 = 27$$

27