





23rd February		 Corbettm@ths
<p>Write the number 1906 in words.</p> <p><i>one thousand, nine hundred and six</i></p>	<p>Write the number twenty thousand, three hundred and twenty nine in figures.</p> <p><i>20,329</i></p>	
<p>Write the number 1906 to the nearest ten.</p> <p><i>1910</i></p>	<p>Write the number 38 627 to the nearest thousand.</p> <p><i>39000</i></p>	
<p>Write $\frac{3}{4}$ as a decimal.</p> <p><i>0.75</i></p>		
<p>Write 2 metres in centimetres</p> <p><i>200cm</i></p>	<p>Write 3.4 metres in centimetres</p> <p><i>340cm</i></p>	
<p>  </p> <p>Pattern 1 Pattern 2 Pattern 3</p>	<p>Draw Pattern 4</p> 