
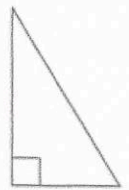
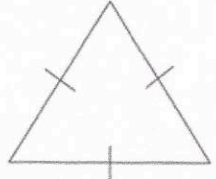


| 25th February   |   |
|---|---|
| <p>A telephone call is 20p for 5 minutes.</p> <p>How much will 20 minutes cost?</p>   | <br>Corbettm@ths<br><br>$80p$  |
| <p>Bill is 1.35m tall.</p> <p>Vicky is 0.4m shorter than Bill.</p> <p>What is Vicky's height?</p>   | $0.95m$   |
|  <p><i>right angle</i></p> <p>What is the name of this type of triangle?</p>  |  <p><i>equilateral</i></p> <p>What is the name of this type of triangle?</p> |
| <p>Work out</p> $3276 \div 7$ $\begin{array}{r} 0468 \\ 7 \overline{) 3276} \\ \underline{7} \phantom{00} \\ 32 \phantom{00} \\ \underline{21} \phantom{00} \\ 117 \phantom{00} \\ \underline{112} \phantom{00} \\ 56 \\ \underline{56} \\ 0 \end{array}$ | $468$   |
| <div style="border: 1px solid black; display: inline-block; padding: 5px;"><math>0.5</math></div> $\div 10 = 0.05$  |   |