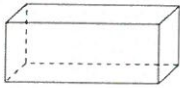



17th January



Corbettmaths



A



B



C

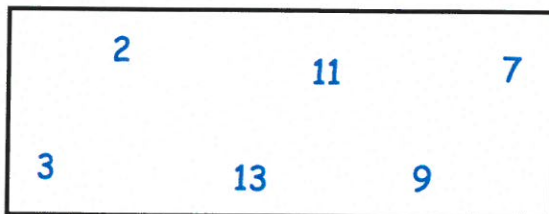
Shape A is called a *cuboid*.....Shape B is called a *cylinder*.....Shape C is called a *sphere*.....

There are 23 passengers on a bus.

At a stop, 14 passengers get off the bus and 8 passengers get on the bus.

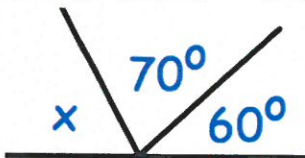
How many passengers are now on the bus?

17



From the numbers in the rectangle, write down the number which is not prime.

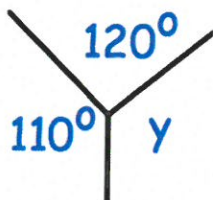
9



Find x

$$(180^\circ - 70^\circ - 60^\circ)$$

$$= 50^\circ$$



Find y

$$(360^\circ - 120^\circ - 110^\circ)$$

$$= 130^\circ$$