

3rd January



Corbettmaths

Anna has eleven **fifty pence** pieces.



How much money does Anna have in total?

£5.50

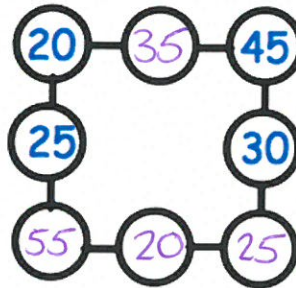
Draw a line parallel to the line AB.

e.g. _____

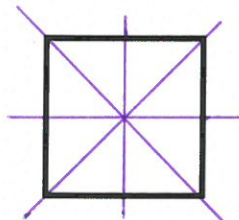


In the diagram, three circles in a straight line **must add to 100**.


Write in the missing numbers.



Draw all the **lines of symmetry** on the square below



Draw all the **lines of symmetry** on the rectangle below



Multiply 29 by 7

$$9 \times 7 = 63$$

$$20 \times 7 = 140$$

$$29 \times 7 = 203$$

$$\begin{array}{r} 29 \\ \times 7 \\ \hline 203 \\ \hline 6 \end{array}$$