

5th January



Corbettmaths

16×10

160

91×100

9,100

7.2×10

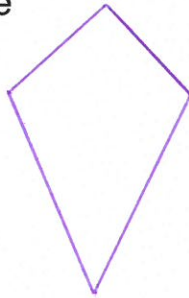
72

0.6×100

60

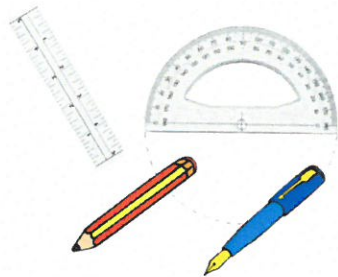

Draw a kite

e.g.



Draw a parallelogram

e.g.



A ruler costs 65p

A protractor costs 72p

A pencil costs 19p

A pen costs 26p

James buys one ruler, one protractor,
one pencil and one pen.

Work out the total cost.

£1.82

How much change should he receive from
£5?

£3.18

Simplify

 $\frac{15}{20}$
 $\frac{3}{4}$