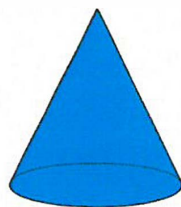


6th January




Corbettmaths



Name this solid

Cone

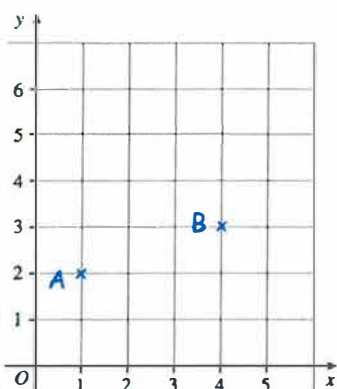


Name this solid

Cylinder

Write down the value of the 6 in the number 17629.

600



Write down the coordinates of the point A

(1, 2)

Write down the coordinates of the point B

(4, 3)

Work out 8 squared.

(8 x 8)

64

Work out 12 squared.

(12 x 12)

144

Mary has £1.20

David has £2

How much money should David give Mary so they have the same amount?

40p

(Mary £1.60
David £1.60)