

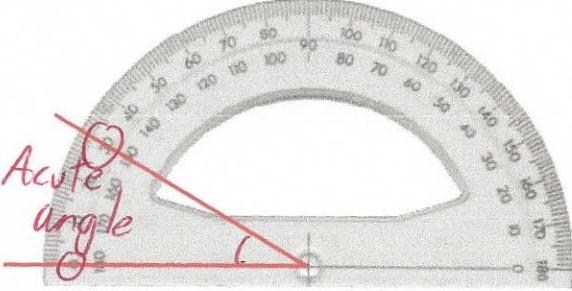



27th June		 Corbettmaths
25000 ÷ 100 <i>250</i>	8 ÷ 10 <i>0.8</i>	
	How many lines of symmetry does the sign have? <i>2</i>	
Aaron has been asked to draw a 150° angle. Explain what he has done wrong. <i>He has read the incorrect value - it is 30°, not 150°.</i>		
15 24 28 33 Which number is the odd one out? why? <i>Lots of answers. Here are some:</i>	<i>28 - only number that is not divisible by 3. 33 - only number divisible by 11. 28 - only number where the digits does not add to 6.</i>	
There are 800 fans at a rugby match between Armagh and Malone. 30% of the fans support Malone. How many fans support Malone?	 <i>10% = 80 30% = 240 =</i>	