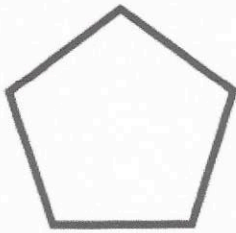





9th June



Name this shape Pentagon

Draw a parallelogram



Work out 10% of 80

8

14 x 4

$$\begin{array}{r} 14 \\ \times 4 \\ \hline 56 \end{array}$$

56

Southville	09 18	10 38	12 05
Leek	09 28	10 48	-----
Milton	09 41	11 01	-----
Newtown	09 49	11 09	-----
Red Island	09 55	11 15	12 36
Sandville	10 13	11 33	-----
Bakerstown	10 31	11 51	13 00

A bus leaves Southville at 09 18

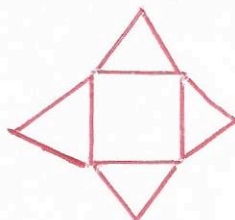
At what time will it reach Sandville?

10:13

How long does the journey take?

55 minutes

Draw the net of a square-based pyramid



Draw the net of a cylinder

