
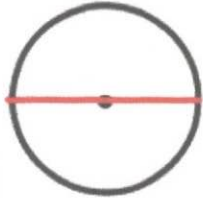
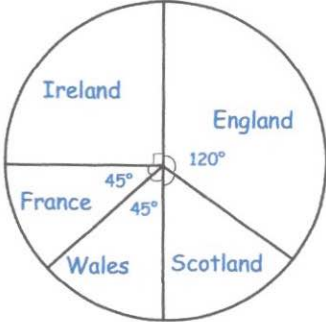


10th March	
Write 14% as a decimal 0.14	Write 24% as a fraction $\frac{6}{25}$ $\frac{24}{100} = \frac{12}{50} = \frac{6}{25}$
Name the part of the circle shown  <i>radius</i>	Name the part of the circle shown  <i>diameter</i>
The total pay in pounds for a salesman is: Total pay = Basic wage + tickets sold \times 3 $120 + 35 \times 3$ $120 + 105$	a) How much does the salesman get for each ticket sold? $\pounds 3$ b) If the basic wage is $\pounds 120$ and he sells 35 tickets, what is the total pay? 225
	600 fans were asked which team they support. $120^\circ (\frac{1}{3})$ How many support England? $600 \div 3 = 200$
$I = PRT$ Find the value of I when $P = 20$, $R = 8$ and $T = 0.5$	$20 \times 8 \times 0.5$ $= 80$