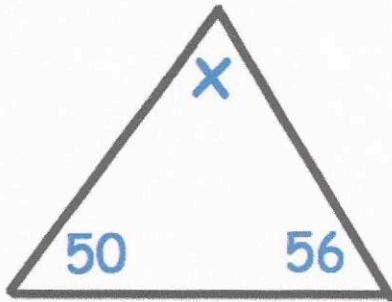


13th March



74°

Work out $12.6 - 3.14$


$$\begin{array}{r} 12.60 \\ - 3.14 \\ \hline 9.46 \end{array}$$

9.46

A teacher has 153 sweets.
The teacher shares the sweets equally
among 9 students.

$$153 \div 9$$

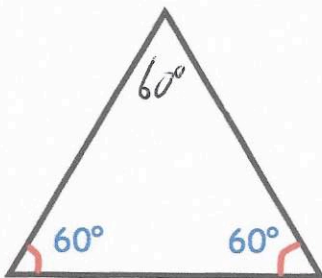
How many sweets does each pupil
receive?



17

$$\begin{array}{r} \square 2 4 \\ - 1 5 \square \\ \hline 6 \square 9 \end{array}$$

$$\begin{array}{r} 8 2 4 \\ - 1 5 5 \\ \hline 6 6 9 \end{array}$$



Not drawn
accurately

What type of triangle is shown?

equilateral triangle