


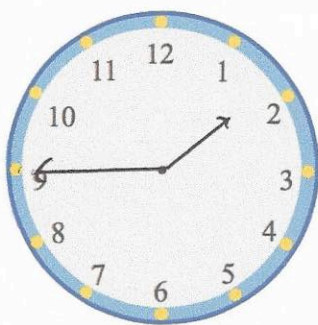


14th March		 CorbettmOths
Find the difference between 903 and 255. 648		
5 friends go on a coach trip. The total cost of the trip is £85. Work out the cost for each person. $£17$		
Draw any lines of symmetry on the shape.		
Jonny says "When you add an even number to an odd number, you will always get an odd number." Is Jonny correct? yes	$10 + 7 = 17$	
	Nick leaves his house at 1:15pm He meets his friend 30 minutes later. $1:45pm$ Show what time he met his friend on the clock.	