

27th March



Corbettmaths



A pizza costs £7.35
Jim pays with a £10 note.

How much change should he receive?

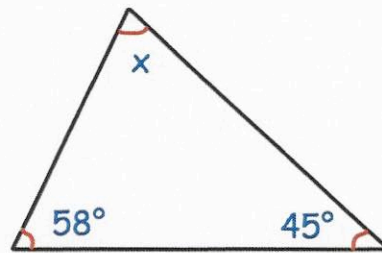
£2.65

Find the size of the angle x.

$$58 + 45 = 103$$

$$180 - 103 =$$

77°

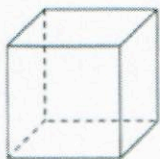



Four tickets for a trip cost a total of £700.

Work out the cost of one ticket.

£175

Draw a 155 degree angle



Shown is a cube

How many faces does a cube have?

6

How many edges does a cube have?

12