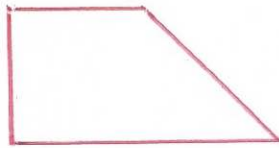


16th May

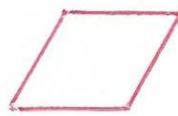


Corbettmaths

Draw a trapezium



Draw a rhombus



How many people could seven 53-seater coaches hold?

$$\begin{array}{r} 53 \\ \times 7 \\ \hline 371 \end{array}$$

371

24 x 13

$$\begin{array}{r} 24 \\ \times 13 \\ \hline 72 \\ 240 \\ \hline \end{array}$$

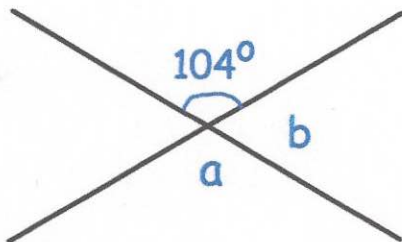
312

Write down the next term in this sequence.

256 128 64 32 16

Describe the rule for continuing the sequence.

divide by 2



Work out the size of angle a

104°

Work out the size of angle b

76°