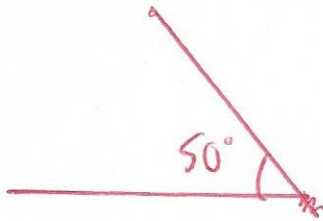


19th May



Corbettmaths

Draw a 50 degree angle



$13.75 + 8.5$

$$\begin{array}{r} 13.75 \\ 8.5 \\ \hline 22.25 \end{array}$$

22.25

$12 - 3.2$

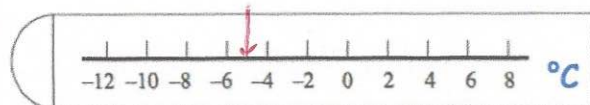
$$\begin{array}{r} 12.0 \\ 3.2 \\ \hline 8.8 \end{array}$$

8.8

The temperature on Monday was 3°C On Tuesday it was 8°C colder.

$3 - 8 = -5$

Show this temperature on the thermometer.

Work out 50% of $\pounds 70$

$$\pounds 35$$

Work out 10% of 8cm

$$0.8\text{cm}$$

or

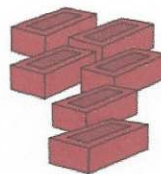
$$8\text{mm}$$

Six bricks weigh 4.8kg

Find the weight of two bricks.

$$6 \overline{) 4.8}$$

0.8



$$\begin{array}{r} 0.8 \\ \times 2 \\ \hline 1.6 \text{ kg} \end{array}$$