
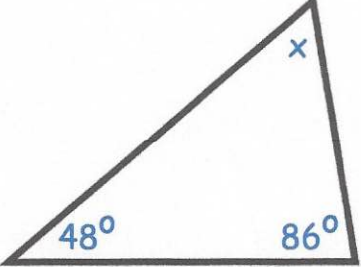



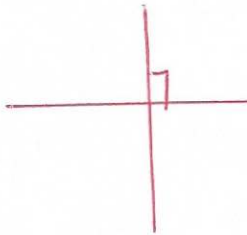



21st May		 Corbettm0ths	
Write the value of the 5 in the number 589 500			
 $48 + 86 = 134^\circ$		Work out the size of angle x $180 - 134 = 46^\circ$	
1 gallon  85p $85 \times 2 = 1.70$	2 gallons  £1.72	Which is better value for money? 1 Gallon	
Draw a pair of parallel lines 		Draw a pair of perpendicular lines 	
A brick costs 60p. A house is made up of 15000 bricks. Work out the total cost of the bricks. 15000×0.6		 $£9000$	