



24th May



Corbettmaths

Draw a shape with one line of symmetry



What type of angle is shown?

Reflex

A fair six-sided dice is thrown.

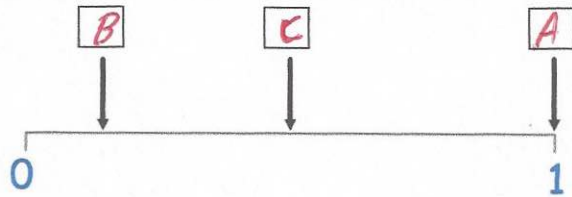


The probabilities of the following events have been marked on the probability scale below.

**A:** A number less than 7 is thrown.

**B:** A "6" is thrown.

**C:** An odd number is thrown.



Place the events A, B and C in the correct boxes.

Work out  $\sqrt{9}$

3

Work out  $14^2$

$$\begin{array}{r} 14 \\ \times 14 \\ \hline 56 \\ 140 \\ \hline 196 \end{array}$$

196