

28th May



Corbettmaths

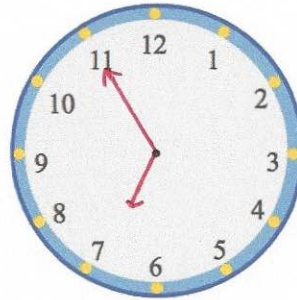
$6000 \div 100$

60

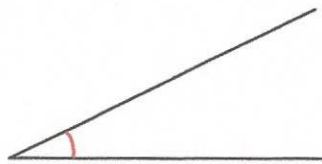
$50 \div 10$

5

Show the time 6:55pm on the clock




Answer *right* angle



Answer *acute* angle



Answer *obtuse* angle



Answer *reflex* angle

Name the types of angle shown above

Eight people book a holiday, costing \$284 each. How much is the total cost?

$$\begin{array}{r} 284 \\ \times 8 \\ \hline 2272 \end{array}$$

\$2272