

5th May



Corbettmaths

**SALE**  
**1/3 OFF ALL ITEMS**

The original price of a football is £8.16  
 $\div 3 = 2.72$

What is the sale price?

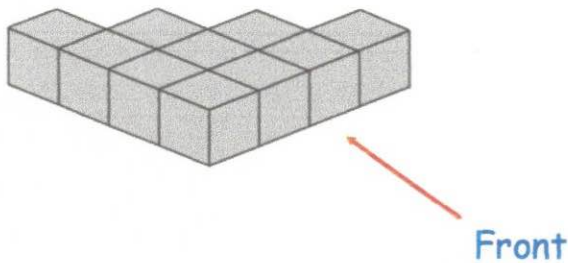
$$8.16 - 2.72 = 5.44$$

$$£5.44$$

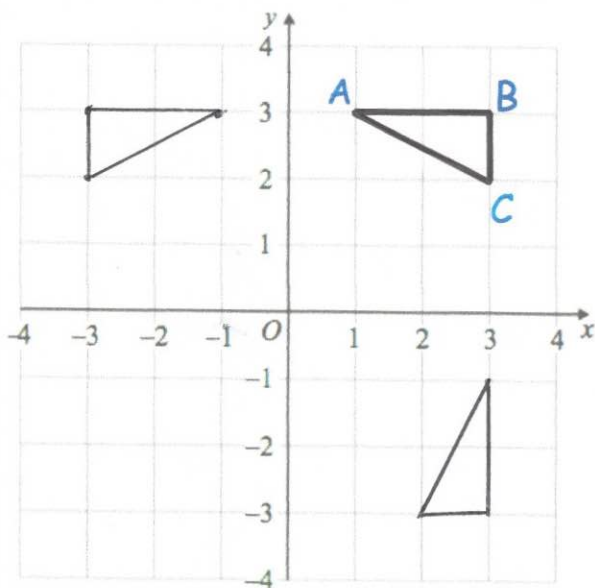
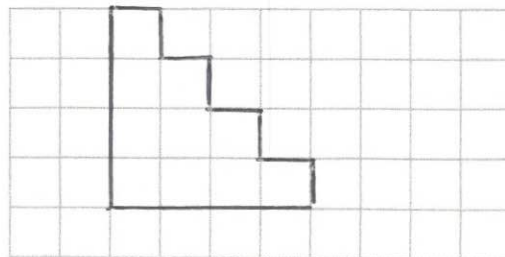
Apples cost  $a$  pence each.  
Bananas cost  $b$  pence each.

Write down an expression for the total cost, in pencil, of 6 apples and 2 bananas.

$$6a + 2b$$



Draw the plan view



Reflect triangle ABC in the y-axis

Rotate triangle ABC 90 degrees clockwise about the origin,