
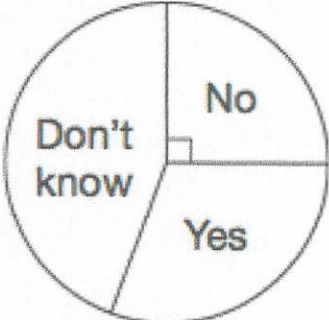



6th May	
<p>Write down the value of 55 twenty pence pieces</p> <p>5 coins = £1</p> <p>55 coins = £11</p>	<p style="text-align: right;"> Corbettmaths</p> <p style="text-align: center; font-size: 2em;">£11</p>
<p>Write $\frac{3}{5}$ as a decimal</p> <p style="text-align: center; font-size: 2em;">0.6</p>	<p>Write $\frac{3}{5}$ as a percentage</p> <p style="text-align: center; font-size: 2em;">60%</p>
	<p>If 60 people were surveyed, how many said 'No?'</p> <p style="text-align: center; font-size: 2em;">15</p>
<p>6cm</p>  <p>5cm</p>	<p>Work out the area of the rectangle</p> <p style="text-align: center; font-size: 1.5em;">$6 \times 5 = 30$</p> <p style="text-align: center; font-size: 1.5em;">30 cm^2</p>
<p>Work out the perimeter of the rectangle</p> <p style="text-align: center; font-size: 1.5em;">$6 + 5 + 6 + 5 = 22 \text{ cm}$</p>	