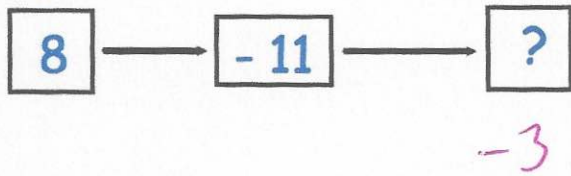


14th October



Corbettmaths

input output



-3

input output

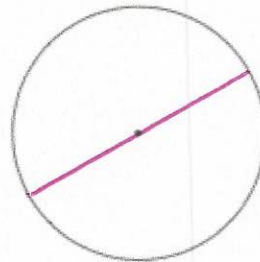


-3

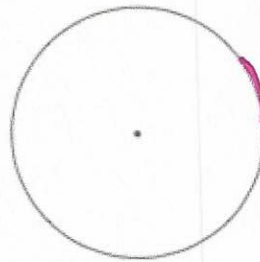
James has 86 marbles and Hannah has 95 marbles. How many marbles do they have altogether?

$$\begin{array}{r} 86 \\ + 95 \\ \hline 181 \end{array}$$

Draw a diameter on the circle



Draw an arc on the circle



A football team gets 3 points for a win, 1 point for a draw and 0 points for a loss.

Southampton have played 8 matches and have 11 points.

Write down a way that Southampton could have been given 11 points.

Number of wins 2^a 3

Number of draws 5 2

Number of losses 1 3