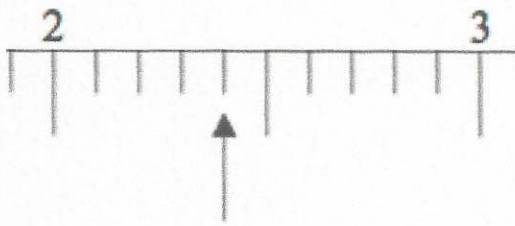


24th October



Corbettmaths

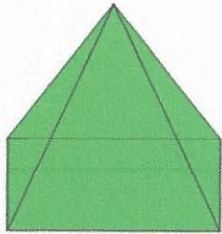


What number is the arrow pointing to?

2.4

Write down all the factors of 44

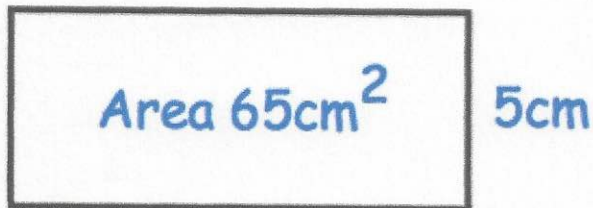
1, 2, 4, 11, 22, 44



How many edges does a square-based pyramid have?

8

y



Find y

13cm

Simplify the ratio 40:8

20:4

10:2

5:1