





<p><b>26th October</b></p>		 <p>Corbettmaths</p>
<p>Shown below is a glass of water.</p> 	<p>Below are four estimates of the amount of water in the glass. Circle the most appropriate estimate.</p> <p>15ml      1.5L      <u>150ml</u>      15L</p>	
<p>The express bus from Dublin to Belfast takes <math>x</math> minutes. The standard bus takes 42 minutes longer.</p> <p>Write down an expression for the time the standard bus takes.</p>	 <p><math>x + 42</math></p>	
<p>The airplane takes half the time the express bus takes.</p> <p>Write down an expression for the time the airplane takes.</p>	 <p><math>\frac{x}{2}</math></p>	
<p>Hannah is recording the number of letters in each word in an article.</p> <p>These are the first ten lengths.</p> <p><del>3</del>   <del>4</del>   <del>2</del>   <del>6</del>   <del>2</del> <del>4</del>   <del>3</del>   <del>7</del>   <del>3</del>   <del>6</del></p>	<p>Work out the median.</p> <p><del>2</del> <del>2</del> <del>6</del> <del>6</del> 3 4 4 6 6 7</p> <p>3.5</p>	
<p>The 11<sup>th</sup> word has 4 letters.</p> <p>Tick the box which describes what affect this will have on the mean.</p> <p><math>40 \div 10 = 4</math></p>	<p>The mean will decrease      The mean will remain the same      The mean will increase</p> <p><input type="checkbox"/>      <input checked="" type="checkbox"/>      <input type="checkbox"/></p>	