
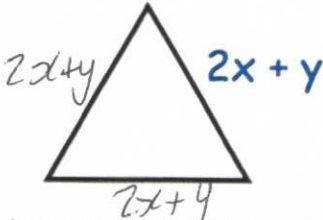
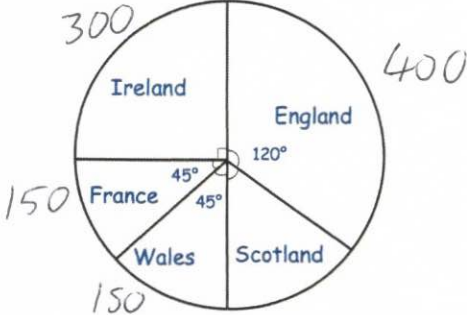


27th March	 Corbettmaths
<p>A piece of wire 68cm long is cut into eight equal pieces. What is the length of each piece?</p> <p style="text-align: center;"><math>68 \div 8</math></p>	<p style="text-align: center;">8.5</p>
<p>A doctor has to see 51 patients. He can see 6 patients per hour, how many hours will it take him?</p> <p style="text-align: center;"><math>51 \div 6</math></p>	<p style="text-align: center;">8.5</p>
<p>Choose a prime number between 50 and 100. Divide it by seven.</p> <p>What is the remainder?</p>	<p style="text-align: center;"> <math display="block">\begin{array}{r} 11 \text{ r } 2 \\ 7 \overline{) 79} \\ \underline{70} \\ 9 \\ 7 \overline{) 59} \\ \underline{49} \\ 10 \\ 7 \overline{) 13} \\ \underline{7} \\ 6 \end{array}</math> </p>
<div style="text-align: center;">  </div> <p>Shown is an equilateral triangle.</p>	<p>Find an expression for the perimeter of the triangle.</p> <p style="text-align: center;"><math>6x + 3y</math></p>
<div style="text-align: center;">  </div>	<p>1200 fans were asked which team they support.</p> <p>How many support Scotland?</p> <p style="text-align: center;">200</p>