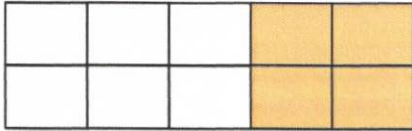


31st March



Corbettmaths

What fraction of this shape is shaded? Give your answer in it's simplest form.



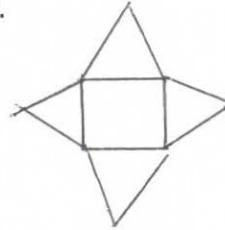
$$\frac{4}{10} = \frac{2}{5}$$



Name this solid

Cylinder

Draw the net of a square based pyramid.



37 x 18

$$\begin{array}{r} 37 \\ \times 18 \\ \hline 296 \\ 370 \\ \hline 666 \end{array}$$

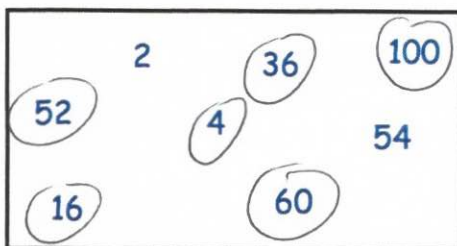
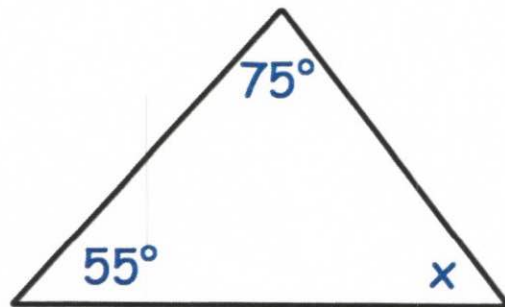
2837 + 829

$$\begin{array}{r} 2837 \\ + 829 \\ \hline 3666 \end{array}$$

Find x

$$55 + 75 = 130$$

$$180 - 130 = 50^\circ$$



Circle all the multiples of 4