

Examples



Click here



Scan here

Workout

Question 1: Construct an equilateral triangle with side length 8cm.

Question 2: Construct a 60° angle

Question 3: Construct a 90° angle

Question 4: Construct a 30° angle

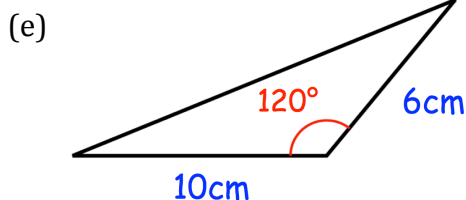
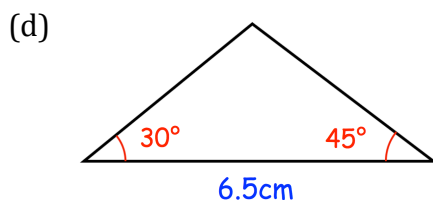
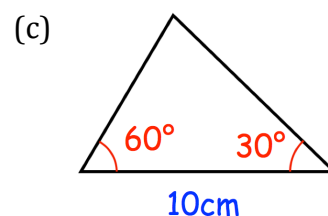
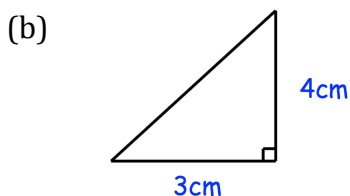
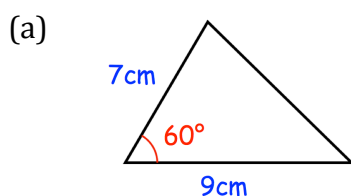
Question 5: Construct a 120° angle

Question 6: Construct a 45° angle

Question 7: Construct a 15° angle

Question 8: Construct a 22.5° angle

Question 9: Construct the following triangles.
You may only use a pencil, ruler and compasses.



Answers



Click here



Scan here