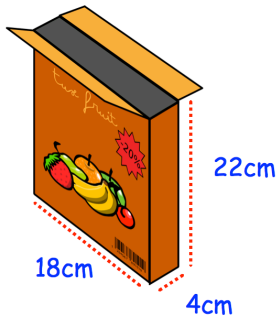


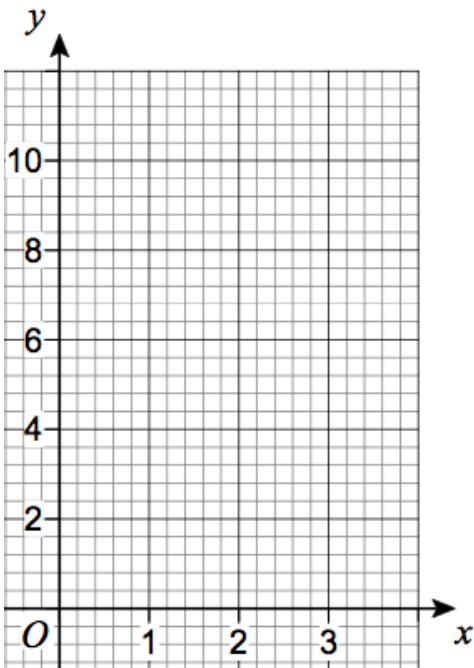
25th February



Corbettmaths

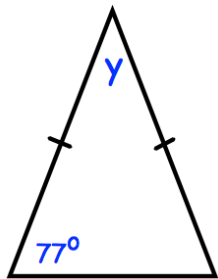


Find the volume of the box



Draw $y = 8$

Draw $y = 3x$



Find the size of the angle marked y

Kyle is organising a charity concert at school.
 The concert is sold out.
 The hall holds 28 rows of 16 seats.
 Each person will pay the same amount of money.

Kyle raises £1344 in total.

How much does each person pay?