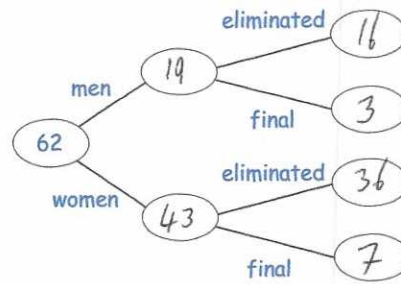


3rd March



Corbettmaths

62 people took part in a talent show
 43 of the people were women.
 10 people made it through to the final and the rest were eliminated.
 3 men made it through to the final.
 Complete the frequency tree



Miss Jones gives her class a test.
 The test is out of 40 marks.

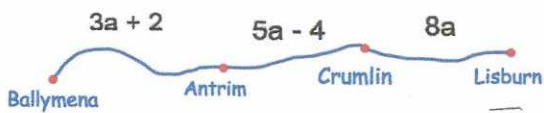
Here are their scores.

38, 31, 29, 20, 35, 32

The pass mark is 75% $75\% \text{ of } 40 = 30$

How many students pass?

5



Write an expression for the distance from Antrim to Lisburn

$13a - 4$

4 Litres



£2.20

6 Litres



£3.24

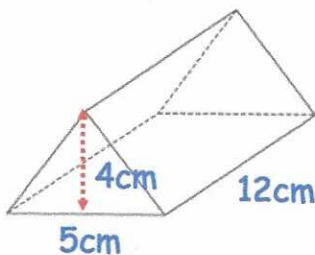
Cooking oil is sold in two sizes of cans.

Which size of can gives the better value for money?

$220 \div 4 = 55p \text{ per litre}$

$324 \div 6 = 54p \text{ per litre}$

6 litre can is best value



Find the volume of the prism.

$\frac{1}{2} (5 \times 4) = 10$

$10 \times 12 = 120 \text{ cm}^3$