




22nd June	
Draw shape with two lines of symmetry	
 <p>20% 20% 20% 20% 20%</p> What percentage of the shape is shaded?	<p>60%</p>
Benny is saving for a guitar that costs £92. He saves £4 each week. How many weeks will it take Benny to save for the guitar?	 $\begin{array}{r} 23 \\ 4 \overline{)92} \end{array}$ <p>23 weeks</p>
Write down a square number that is also an even number.	<p>4</p>
David buys a ruler for 60p and two pencils. Both pencils cost the same price. David pays with a £5 note and receives £3.10 change.	How much does one pencil cost? $5.00 - 3.10 = \text{£}1.90 \text{ spent}$ $\text{£}1.90 - \text{£}0.60 = \text{£}1.30$ $\text{£}1.30 \div 2 = 65\text{p}$