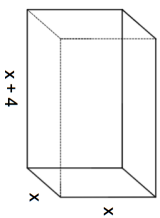


Name: _____

5-a-day

Foundation Plus

10th April



The volume of the cuboid is 1050cm^3 .
An expression for the volume of the cuboid is $x^3 + 4x^2$

Find the value of x to 1 decimal place

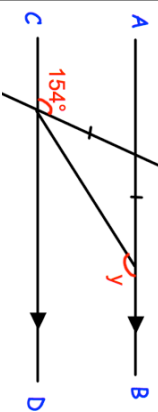
Factorise $y^2 + 14y + 48$

Factorise $9y^2 - 1$

Express as a single power of y .

$$(y^5 \times y^6)^2$$

Find the size of y .

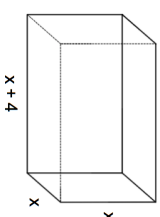


Name: _____

5-a-day

Foundation Plus

10th April



The volume of the cuboid is 1050cm^3 .
An expression for the volume of the cuboid is $x^3 + 4x^2$

Find the value of x to 1 decimal place

Factorise $y^2 + 14y + 48$

Factorise $9y^2 - 1$

Express as a single power of y .

$$(y^5 \times y^6)^2$$

Find the size of y .

