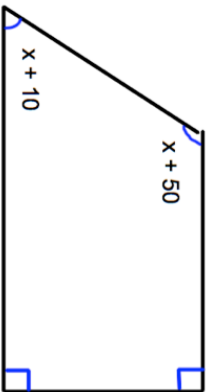
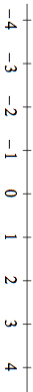
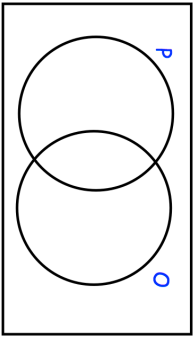


Name: \_\_\_\_\_

5-a-day

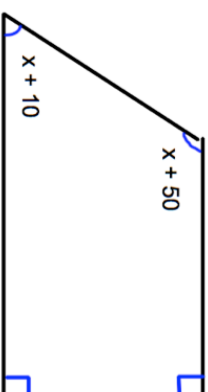

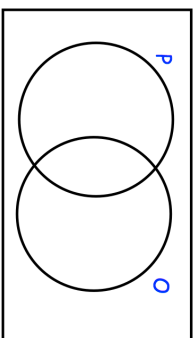
Foundation Plus

<p><b>15th April</b></p> 	<p>Find x</p> <p style="text-align: right;">Corbettmaths</p>
<p>Solve <math>5x + 1 \leq 6.5</math></p>	<p>Represent the answer on the number line</p> 
<p>Expand and simplify</p> <p><math>(y + 2)(y + 1)</math></p>	
<p><math>\xi</math></p> 	<p><math>\xi = \{1, 2, 3, 4, 5, 6, 7, 8, 9, 10, 11, 12, 13\}</math>  <math>O = \text{Odd numbers}</math>  <math>P = \text{Prime numbers}</math>          Complete the Venn diagram</p>
<p>A number is chosen at random</p> <p>Find <math>P(O \cup P)</math></p>	<p>A number is chosen at random</p> <p>Find <math>P(O \cap P)</math></p>

Name: \_\_\_\_\_

5-a-day

Foundation Plus

<p><b>15th April</b></p> 	<p>Find x</p> <p style="text-align: right;">Corbettmaths</p>
<p>Solve <math>5x + 1 \leq 6.5</math></p>	<p>Represent the answer on the number line</p> 
<p>Expand and simplify</p> <p><math>(y + 2)(y + 1)</math></p>	
<p><math>\xi</math></p> 	<p><math>\xi = \{1, 2, 3, 4, 5, 6, 7, 8, 9, 10, 11, 12, 13\}</math>  <math>O = \text{Odd numbers}</math>  <math>P = \text{Prime numbers}</math>          Complete the Venn diagram</p>
<p>A number is chosen at random</p> <p>Find <math>P(O \cup P)</math></p>	<p>A number is chosen at random</p> <p>Find <math>P(O \cap P)</math></p>