
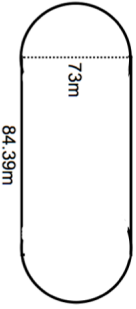
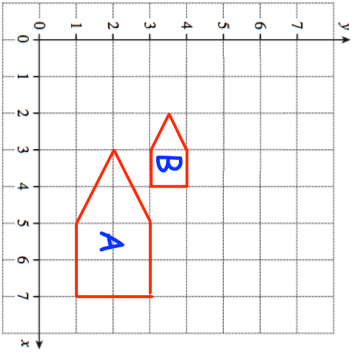


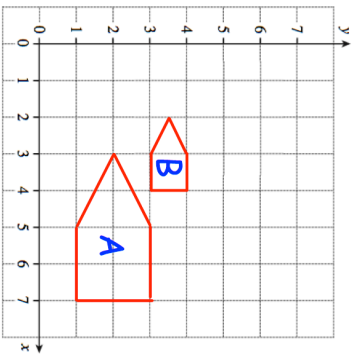


2nd April	 Corbettmaths
Expand and simplify $5(3x + 2) + 4(x + 9)$	
Find the area inside the running track. 	
Here are the equations of four lines. Line 1 $2y = 8x + 6$ Line 2 $x + y = 6$ Line 3 $4x - y = 5$ Line 4 $4x + 2y = 1$	Two of the lines are parallel. Which lines?
	Describe fully the single transformation that maps shape A onto shape B. Reflect B in the mirror line $x = 5$

2nd April	 Corbettmaths
Expand and simplify $5(3x + 2) + 4(x + 9)$	
Find the area inside the running track. 	
Here are the equations of four lines. Line 1 $2y = 8x + 6$ Line 2 $x + y = 6$ Line 3 $4x - y = 5$ Line 4 $4x + 2y = 1$	Two of the lines are parallel. Which lines?
	Describe fully the single transformation that maps shape A onto shape B. Reflect B in the mirror line $x = 5$