

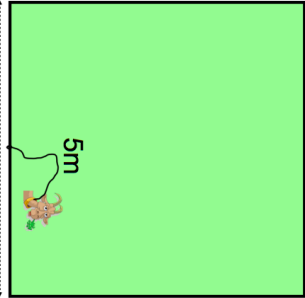


Name: \_\_\_\_\_

5-a-day



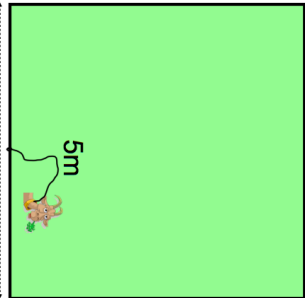
Foundation Plus

<b>20th April</b>		
Annie, Beth and Carly go shopping. Annie spend $m$ pounds. Beth spend twice as much as Annie. Carly spend 5 pounds more than Annie.		Write down, in terms of $m$ , an inequality to show this information.
The total amount of money spent, in pounds, is more than £60.		
Work out $(4.5 \times 10^7) \div (5 \times 10^{-2})$ Give your answer in standard form.		
The distance from Junction 19 to Junction 20 on a motorway is 14 miles. Bethany drove the distance in 15 minutes. Max drove the distance at a speed of 52mph. Who was faster?		
		
A goat is in a square field which has length 12m. The goat is tied to the middle of a 12m fence on one side with a 5m rope.		Work out the percentage of the field the goat can reach.

Name: \_\_\_\_\_

5-a-day

Foundation Plus

<b>20th April</b>		
Annie, Beth and Carly go shopping. Annie spend $m$ pounds. Beth spend twice as much as Annie. Carly spend 5 pounds more than Annie.		Write down, in terms of $m$ , an inequality to show this information.
The total amount of money spent, in pounds, is more than £60.		
Work out $(4.5 \times 10^7) \div (5 \times 10^{-2})$ Give your answer in standard form.		
The distance from Junction 19 to Junction 20 on a motorway is 14 miles. Bethany drove the distance in 15 minutes. Max drove the distance at a speed of 52mph. Who was faster?		
		
A goat is in a square field which has length 12m. The goat is tied to the middle of a 12m fence on one side with a 5m rope.		Work out the percentage of the field the goat can reach.