
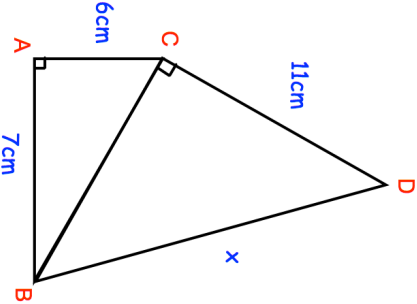


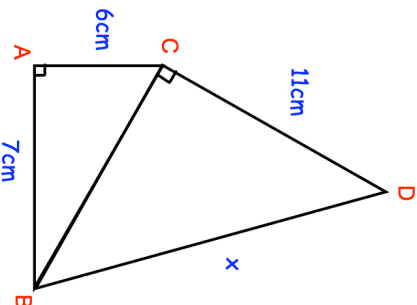



25th April													
Solve the inequality $2x + 9 > 19 - 8x$	Sketch the range of possible solutions on a number line.												
	Find x												
$y = x^3$ <p>Complete the table of values and draw a graph</p>													
<table border="1" data-bbox="290 145 367 548"> <tr> <td>x</td> <td>-2</td> <td>-1</td> <td>0</td> <td>1</td> <td>2</td> </tr> <tr> <td>y</td> <td></td> <td></td> <td></td> <td></td> <td></td> </tr> </table>	x	-2	-1	0	1	2	y						
x	-2	-1	0	1	2								
y													

25th April													
Solve the inequality $2x + 9 > 19 - 8x$	Sketch the range of possible solutions on a number line.												
	Find x												
$y = x^3$ <p>Complete the table of values and draw a graph</p>													
<table border="1" data-bbox="290 1234 367 1637"> <tr> <td>x</td> <td>-2</td> <td>-1</td> <td>0</td> <td>1</td> <td>2</td> </tr> <tr> <td>y</td> <td></td> <td></td> <td></td> <td></td> <td></td> </tr> </table>	x	-2	-1	0	1	2	y						
x	-2	-1	0	1	2								
y													