

Name: \_\_\_\_\_

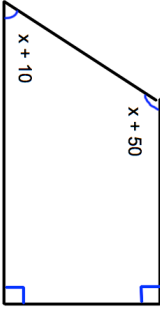


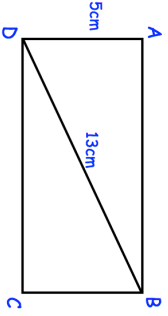
5-a-day

Foundation Plus

3rd April

Factorise  $4mn - 16m^2$

Corbettmaths

	Calculate the size of the largest angle in the trapezium.
 <p>Front elevation</p>  <p>Plan view</p>	Draw a sketch of the solid shape.
	Shown is a shape made out of 5 pieces of metal. Work out the total length of the 5 pieces of metal.
Megan has 102 DVDs. This number of DVDs is 70% more than the number she had last month. How many DVDs did Megan have last month?	

Name: \_\_\_\_\_

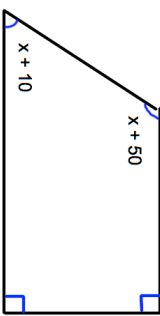
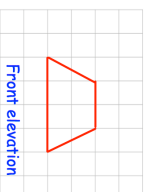
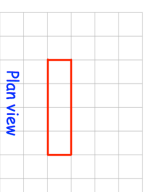
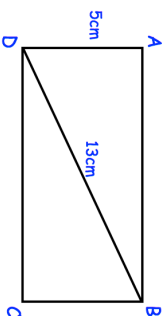
5-a-day

Foundation Plus

3rd April

Factorise  $4mn - 16m^2$

Corbettmaths

	Calculate the size of the largest angle in the trapezium.
 <p>Front elevation</p>  <p>Plan view</p>	Draw a sketch of the solid shape.
	Shown is a shape made out of 5 pieces of metal. Work out the total length of the 5 pieces of metal.
Megan has 102 DVDs. This number of DVDs is 70% more than the number she had last month. How many DVDs did Megan have last month?	