
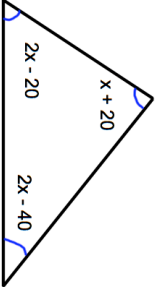
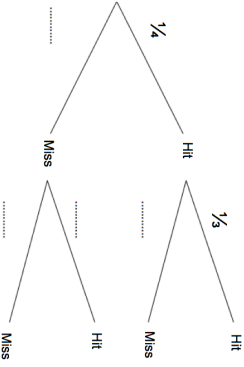

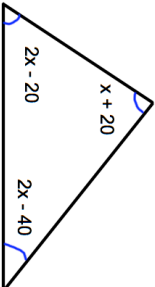
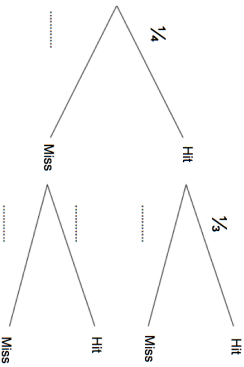


30th April	Corbettmaths 
<p>A television is sold in the sales with a 20% discount. In the sales, the television is sold for £99.20</p> <p>What is the usual price of the television?</p>	
<p>Each exterior angle of a regular polygon is <math>5^\circ</math></p> <p>How many sides does the polygon have?</p>	<p>What is the sum of the interior angles of the polygon?</p>
	<p>Work out the value of <math>x</math>.</p>
<p>Jennifer is playing darts. She throws two darts aiming for a Bullseye. The probability Jennifer hits the Bullseye on her first throw is <math>\frac{1}{4}</math>. The probability she hits the Bullseye on her second throw <math>\frac{1}{3}</math>.</p> <p>First throw</p> <p>Second throw</p>	<p>Complete the tree diagram.</p>
	<p>Work out the probability Jennifer hits the Bullseye twice.</p>

30th April	Corbettmaths 
<p>A television is sold in the sales with a 20% discount. In the sales, the television is sold for £99.20</p> <p>What is the usual price of the television?</p>	
<p>Each exterior angle of a regular polygon is <math>5^\circ</math></p> <p>How many sides does the polygon have?</p>	<p>What is the sum of the interior angles of the polygon?</p>
	<p>Work out the value of <math>x</math>.</p>
<p>Jennifer is playing darts. She throws two darts aiming for a Bullseye. The probability Jennifer hits the Bullseye on her first throw is <math>\frac{1}{4}</math>. The probability she hits the Bullseye on her second throw <math>\frac{1}{3}</math>.</p> <p>First throw</p> <p>Second throw</p>	<p>Complete the tree diagram.</p>
	<p>Work out the probability Jennifer hits the Bullseye twice.</p>