

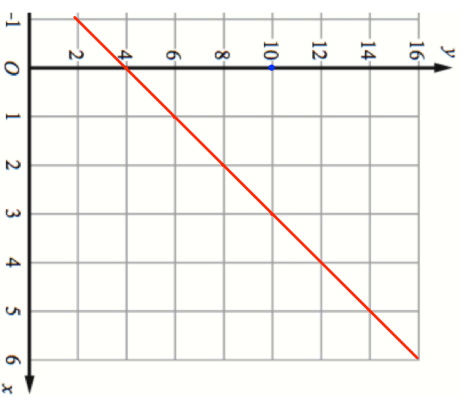




|  |  |   |  |
|--|--|---|--|
| <b>8th April</b>   |  |  |  |
| Truncate 5.3867 to 2 decimal places  |  |  |  |
| In a sale, normal prices are reduced by 15%.<br>The sale price of a DVD player is £136<br>Work out the normal price of the DVD player. | Find the gradient of the line shown.                           |   |  |
|  | Write down the equation of the line shown.                     |   |  |
| What is the sum of the interior angles for a decagon?  | What is the size of each interior angle for a regular decagon? |   |  |



|  |  |   |  |
|--|--|---|--|
| <b>8th April</b>   |  |  |  |
| Truncate 5.3867 to 2 decimal places  |  |  |  |
| In a sale, normal prices are reduced by 15%.<br>The sale price of a DVD player is £136<br>Work out the normal price of the DVD player. | Find the gradient of the line shown.                           |   |  |
|  | Write down the equation of the line shown.                     |   |  |
| What is the sum of the interior angles for a decagon?  | What is the size of each interior angle for a regular decagon? |   |  |

