
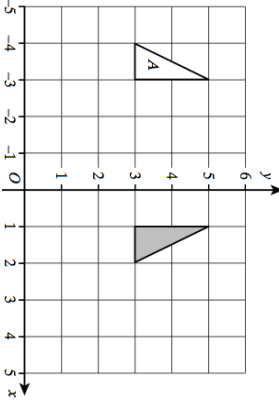
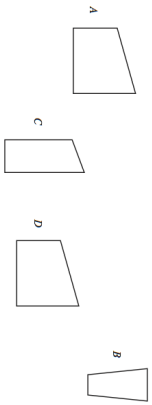

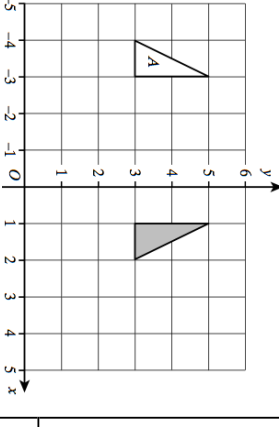
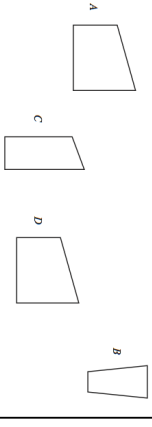


<b>12th April</b>	 Corbettmaths
<p>A man drives 280 miles in 5 hours. What is his average speed?</p>	
	<p>Describe the single transformation that takes A to the shaded triangle.</p>
	<p>Translate A by translation vector.</p> $\begin{pmatrix} 2 \\ -1 \end{pmatrix}$
	<p>Which shapes are congruent?</p>
<p>A box has 200 pencils. <math>\frac{3}{4}</math> are sharpened, the remainder are not. How many are not sharpened?</p>	

<b>12th April</b>	 Corbettmaths
<p>A man drives 280 miles in 5 hours. What is his average speed?</p>	
	<p>Describe the single transformation that takes A to the shaded triangle.</p>
	<p>Translate A by translation vector.</p> $\begin{pmatrix} 2 \\ -1 \end{pmatrix}$
	<p>Which shapes are congruent?</p>
<p>A box has 200 pencils. <math>\frac{3}{4}</math> are sharpened, the remainder are not. How many are not sharpened?</p>	