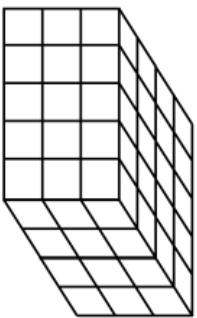


Name: _____

5-a-day

Foundation


19th April



Each cube has side length 1cm.

Work out the volume of the cuboid.

Work out the surface area.



Complete the two-way table

	Red	Green
Square		
Circle		

Write 0.075 as a simplified fraction

Divide £400 in the ratio 5 : 3 : 2

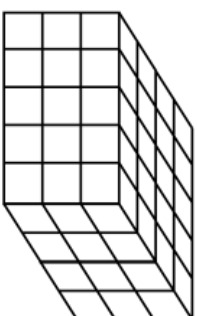
£..... £..... £.....

Name: _____

5-a-day

Foundation


19th April



Each cube has side length 1cm.

Work out the volume of the cuboid.

Work out the surface area.



Complete the two-way table

	Red	Green
Square		
Circle		

Write 0.075 as a simplified fraction

Divide £400 in the ratio 5 : 3 : 2

£..... £..... £.....