
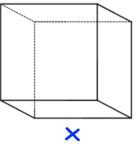

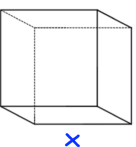


30th April	Corbettmaths 
21 ÷ -7	
<p>Here are the number of goals they scored in each game:</p> <p>6    0    3    2    2    2    5</p> <p>Work out the median number of goals scored.</p>	
<p><b>Bolognese Sauce</b></p> <p>Minced Beef            500 g Chopped Tomatoes    750 g Mushrooms            40 g Chicken Stock         150 ml</p> <p>The ingredients above serve 4 people.</p>	<p>How much of each ingredient is need for 12 people?</p>
<p>Write down the largest of these three fractions</p> <p><math>\frac{3}{5}</math>    <math>\frac{11}{20}</math>    <math>\frac{1}{2}</math></p>	
<p> x</p> <p>The volume of the cube is 64cm<sup>3</sup></p>	<p>Find the side length, x.</p>

30th April	Corbettmaths 
21 ÷ -7	
<p>Here are the number of goals they scored in each game:</p> <p>6    0    3    2    2    2    5</p> <p>Work out the median number of goals scored.</p>	
<p><b>Bolognese Sauce</b></p> <p>Minced Beef            500 g Chopped Tomatoes    750 g Mushrooms            40 g Chicken Stock         150 ml</p> <p>The ingredients above serve 4 people.</p>	<p>How much of each ingredient is need for 12 people?</p>
<p>Write down the largest of these three fractions</p> <p><math>\frac{3}{5}</math>    <math>\frac{11}{20}</math>    <math>\frac{1}{2}</math></p>	
<p> x</p> <p>The volume of the cube is 64cm<sup>3</sup></p>	<p>Find the side length, x.</p>