

Name: _____

5-a-day

Foundation

5th April

5 2 4 8 2 1 5 3 2

Corbettmaths



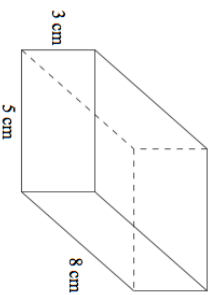
a) Find the mode

b) Find the median

c) Work out the range

a) how faces does this cuboid have?

b) Work out the volume



Mark and Mary share £16 in the ratio 1:3

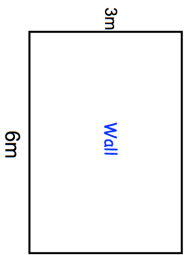
How much does Mary receive?

James is drawing a pie chart

| Meal | Frequency |
|------------|-----------|
| Chicken | 14 |
| Beef | 9 |
| Pork | 57 |
| Vegetarian | 10 |

Calculate the size of each angle.

Not to scale



How many tiles are needed to cover the wall?

Name: _____

5-a-day

Foundation

5th April

5 2 4 8 2 1 5 3 2

Corbettmaths



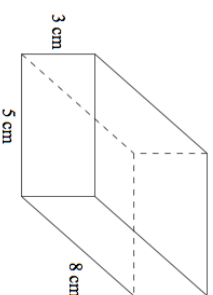
a) Find the mode

b) Find the median

c) Work out the range

a) how faces does this cuboid have?

b) Work out the volume



Mark and Mary share £16 in the ratio 1:3

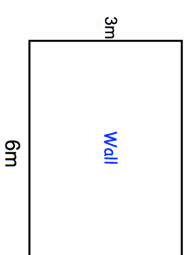
How much does Mary receive?

James is drawing a pie chart

| Meal | Frequency |
|------------|-----------|
| Chicken | 14 |
| Beef | 9 |
| Pork | 57 |
| Vegetarian | 10 |

Calculate the size of each angle.

Not to scale



How many tiles are needed to cover the wall?