

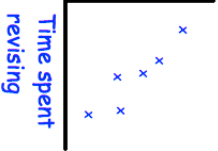
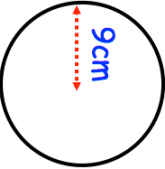


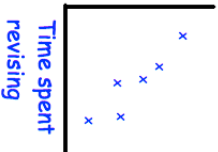
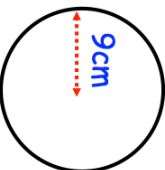


|   |  |
|---|--|
| <p>7th April</p>                                   | <p>Shown is a parallelogram.  Corbettmaths</p> <p>What order of rotational symmetry does it have?</p> |
| <p>Mistakes</p>                                     | <p>What type of correlation is shown?</p>  |
| <p>Work out, as a simplified fraction.</p> $\frac{3}{4} - \frac{2}{5}$  |  |
| <p>I'm thinking of a number<br/>A <math>\frac{1}{3}</math> of a number is 6.<br/>Work out <math>\frac{1}{2}</math> of the number.</p> |  |
|    | <p>Work out the circumference of the circle.<br/>Give your answer to 1 decimal place.</p>  |

|   |  |
|---|--|
| <p>7th April</p>                                 | <p>Shown is a parallelogram.  Corbettmaths</p> <p>What order of rotational symmetry does it have?</p> |
| <p>Mistakes</p>                                   | <p>What type of correlation is shown?</p>  |
| <p>Work out, as a simplified fraction.</p> $\frac{3}{4} - \frac{2}{5}$  |  |
| <p>I'm thinking of a number<br/>A <math>\frac{1}{3}</math> of a number is 6.<br/>Work out <math>\frac{1}{2}</math> of the number.</p> |  |
|    | <p>Work out the circumference of the circle.<br/>Give your answer to 1 decimal place.</p>  |