

Name: \_\_\_\_\_

5-a-day

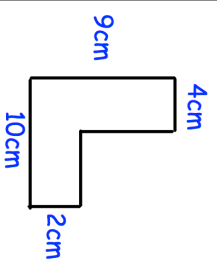
Foundation



9th April

Calculate the perimeter

Corbettmaths

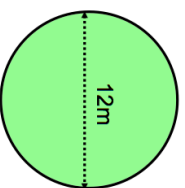


Factorise  $x^2 + 3x$

Greg's wage is £520 a week.  
He receives a 5% wage rise.

Work out Greg's new weekly wage.

What fraction of 60 is 12?



Find the area of the circle

Name: \_\_\_\_\_

5-a-day

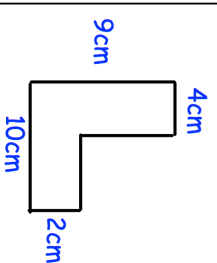
Foundation



9th April

Calculate the perimeter

Corbettmaths

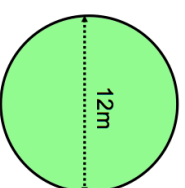


Factorise  $x^2 + 3x$

Greg's wage is £520 a week.  
He receives a 5% wage rise.

Work out Greg's new weekly wage.

What fraction of 60 is 12?



Find the area of the circle