
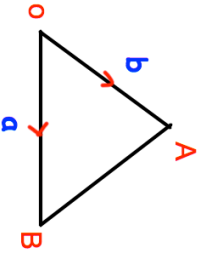
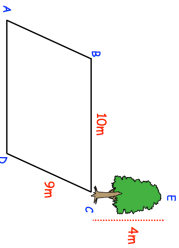


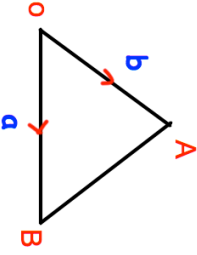
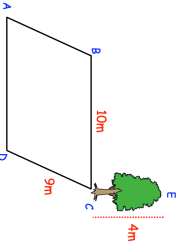


10th April	 Corbettmaths
<p><math>y</math> is inversely proportional to the cube of <math>x</math>. If <math>y = 4</math>, <math>x = 2</math>.</p> <p>Find <math>y</math> when <math>x = 1</math>.</p>	
	<p>What is the vector <math>\overrightarrow{AB}</math>?</p>
	<p>Calculate the distance <math>AE</math></p>
	
<p>Simplify</p> $\frac{x^2 + 10x + 24}{x^2 - 36}$	
<p>Mrs Jenkins is making decorations for a wedding. She needs <math>19\sqrt{5}</math> metres of ribbon in total. Mrs Jenkins has 40 metres of ribbon. Does she have enough ribbon?</p>	

10th April	 Corbettmaths
<p><math>y</math> is inversely proportional to the cube of <math>x</math>. If <math>y = 4</math>, <math>x = 2</math>.</p> <p>Find <math>y</math> when <math>x = 1</math>.</p>	
	<p>What is the vector <math>\overrightarrow{AB}</math>?</p>
	<p>Calculate the distance <math>AE</math></p>
	
<p>Simplify</p> $\frac{x^2 + 10x + 24}{x^2 - 36}$	
<p>Mrs Jenkins is making decorations for a wedding. She needs <math>19\sqrt{5}</math> metres of ribbon in total. Mrs Jenkins has 40 metres of ribbon. Does she have enough ribbon?</p>	