
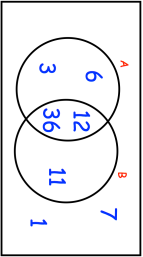
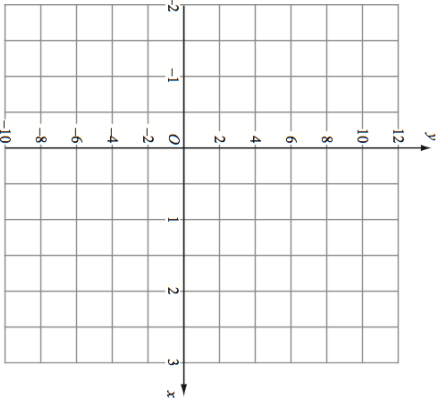

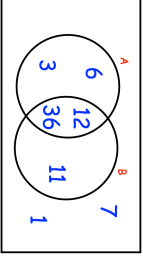
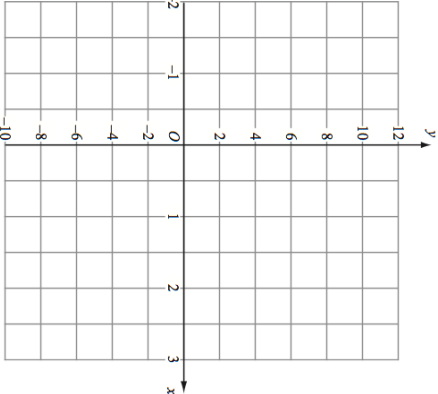


13th April Solve $\frac{2x-5}{7} - \frac{2x-1}{2} = 3$	 Corbettmaths
ξ 	Write down the numbers that are in set $A \cup B$
	On the grid, label the region that satisfies all three of these inequalities $-1 < x < 2$ $y \leq 8$ $y \geq 4x - 4$
$(x+a)^2(x-2) = x^3 + bx^2 + 12x - 72$ Find a and b	

13th April Solve $\frac{2x-5}{7} - \frac{2x-1}{2} = 3$	 Corbettmaths
ξ 	Write down the numbers that are in set $A \cup B$
	On the grid, label the region that satisfies all three of these inequalities $-1 < x < 2$ $y \leq 8$ $y \geq 4x - 4$
$(x+a)^2(x-2) = x^3 + bx^2 + 12x - 72$ Find a and b	