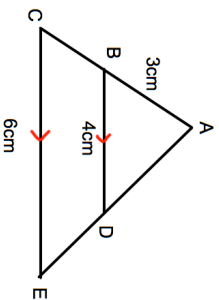
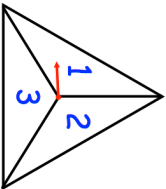
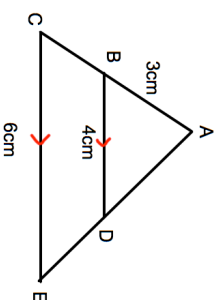
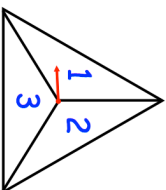


<p>20th April</p> 	<p>Find the length of BC.</p> <p style="text-align: right;">Corbettmaths</p>
<p>Solve</p> $\frac{3x + 5}{10 - x} = 1.5$	
<p>A shirt is increased in price by 20% at the start of 2014.</p> <p>In the sales, in March, it is then reduced in price by 15%.</p> <p>Work out the overall change in price since 2013.</p>	
	<p>The spinner is spun twice.</p> <p>A score is found by multiplying the two numbers together.</p> <p>Find the probability of scoring a 4?</p>
<p>A group of scientists want to estimate the number of squirrels in a wood. They catch and ring 20 squirrels. They return the 20 squirrels to the wood.</p> <p>They then catch 50 squirrels and 13 are ringed.</p>	<p>Estimate the number of squirrels in the wood.</p>

<p>20th April</p> 	<p>Find the length of BC.</p> <p style="text-align: right;">Corbettmaths</p>
<p>Solve</p> $\frac{3x + 5}{10 - x} = 1.5$	
<p>A shirt is increased in price by 20% at the start of 2014.</p> <p>In the sales, in March, it is then reduced in price by 15%.</p> <p>Work out the overall change in price since 2013.</p>	
	<p>The spinner is spun twice.</p> <p>A score is found by multiplying the two numbers together.</p> <p>Find the probability of scoring a 4?</p>
<p>A group of scientists want to estimate the number of squirrels in a wood. They catch and ring 20 squirrels. They return the 20 squirrels to the wood.</p> <p>They then catch 50 squirrels and 13 are ringed.</p>	<p>Estimate the number of squirrels in the wood.</p>