
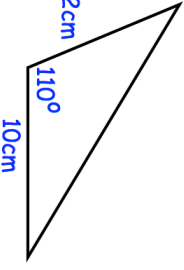

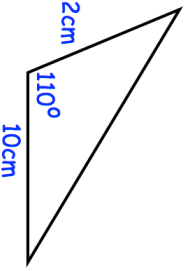


26th April	 Corbettmaths
Natalie is asked by her teacher to write 203,450 in standard form.	Explain why Natalie is wrong.
Natalie writes 20.3×10^4	
	Calculate the length of the missing side.
A cube has side length 9cm. A sphere has radius r . The cube and sphere have the same volume. Calculate r .	
Here are the fifth and sixth terms of a Fibonacci-type sequence. _____ 17 26 Find the first term of the sequence.	
Here are the first and third terms of a different Fibonacci-type sequence d _____ e _____ Work out an expression in terms of d and e for the sixth term	

26th April	 Corbettmaths
Natalie is asked by her teacher to write 203,450 in standard form.	Explain why Natalie is wrong.
Natalie writes 20.3×10^4	
	Calculate the length of the missing side.
A cube has side length 9cm. A sphere has radius r . The cube and sphere have the same volume. Calculate r .	
Here are the fifth and sixth terms of a Fibonacci-type sequence. _____ 17 26 Find the first term of the sequence.	
Here are the first and third terms of a different Fibonacci-type sequence d _____ e _____ Work out an expression in terms of d and e for the sixth term	